



Orientation




Look closely at the dragon and find out what happened to it in the pictures below.
How is it turned?



It is turned to the right.




It is turned to the left.



It is turned to the right.



It is turned to the left.



It is turned to the right.



It is turned to the left.



It is turned to the right.



It is turned to the left.

