

Math riddle with pictures

1st class







Each symbol represents one number (1-9).



Try to solve the calculation correctly.

	+	5	=	7
---	---	---	---	---




	=
---	---


	+		=	
---	---	---	---	---



	=
---	---


	+		=	7
---	---	---	---	---

	=
---	---

	-		=	
---	---	---	---	---

	=
---	---

	+		=	
---	---	---	---	---

	=
---	---