


Math riddle with pictures

1st class




Each symbol represents one number (1-9).



Try to solve the calculation correctly.


	+		=	6
---	---	---	---	---



	=	
---	---	--

	-	1	=	
---	---	---	---	---


	=	
---	---	--

	+		=	7
---	---	---	---	---

	=	
---	---	--

	+		=	
---	---	---	---	---

	=	
---	---	--

	-	?	=	?
---	---	---	---	---

?	=	
---	---	--