

Math riddle with pictures

1st class






Each symbol represents one number (1-9).

Try to solve the calculation correctly.


8	-		=	
---	---	---	---	---



	=	
---	---	--

	+		=	9
---	---	---	---	---




	=	
---	---	--

	-		=	
---	---	---	---	---

	=	
---	---	--

8	-		=	
---	---	---	---	---

	=	
---	---	--

	-		=	
---	---	---	---	---

	=	
---	---	--