
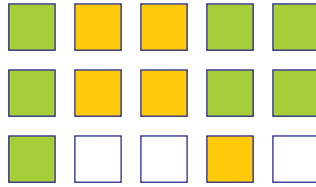


# Math online school

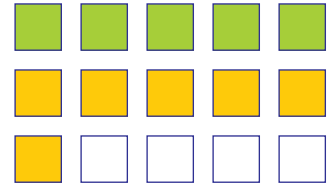
Write the correct number of yellow and green squares.



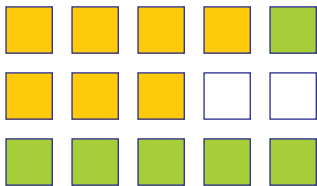
 4  \_\_\_\_\_




 \_\_\_\_\_  \_\_\_\_\_




 \_\_\_\_\_  \_\_\_\_\_



 \_\_\_\_\_  \_\_\_\_\_



 \_\_\_\_\_  \_\_\_\_\_



 \_\_\_\_\_  \_\_\_\_\_

**Add!**



$3 + 4 = \underline{\hspace{2cm}}$



$4 + 5 = \underline{\hspace{2cm}}$



$1 + 6 = \underline{\hspace{2cm}}$



$2 + 3 = \underline{\hspace{2cm}}$



$6 + 4 = \underline{\hspace{2cm}}$